

forza di massa

$$\underline{f} = (\rho g \sin \alpha, -\rho g \cos \alpha)$$

H è incognita e dipende
dal flusso di fluido Q

Al solito supponiamo $\underline{v} = v(y, t) \underline{i}$

$$\text{div } \underline{v} = \frac{\partial v}{\partial x} = 0$$

$$\left\{ \begin{array}{l} \rho \frac{\partial v}{\partial t} = -\frac{\partial p}{\partial x} + \frac{\partial}{\partial y} [\underbrace{\mu v_y + \tau}_{S_{12}}] + \rho g \sin \alpha \\ 0 = -\frac{\partial p}{\partial y} - \rho g \cos \alpha \end{array} \right.$$

$$v_y(s, t) = 0$$

$$\text{c.c. } v(0, t) = 0$$

STAZIONARIO

$$S_{12} = \mu v_y + \tau$$

$$S_{12}|_s = \tau$$

INTEGRO

$$\left\{ \begin{array}{l} \mu v_{yy} + \rho g \sin \alpha - \cancel{p_x} = 0 \\ p_y + \rho g \cos \alpha = 0 \end{array} \right.$$

$$p = -\rho g \cos \alpha y + k$$

p_a = pressione atmosferica

$$p_a = -\rho g \cos \alpha H + k$$

$$\boxed{p = p_a + \rho g \cos \alpha (H - y)} \Rightarrow p_x = 0$$

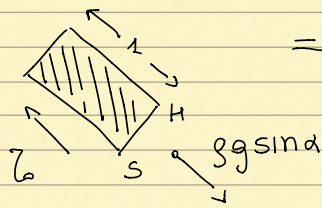
$$\mu V_{yy} = -\rho g \sin \alpha \quad \rightarrow \quad \mu V_y = -\rho g \sin \alpha y + K \quad V_y(s) = 0$$

$$\mu V_y = \rho g \sin \alpha (s - y) \geq 0 \quad \text{se } y \in [0, s] \text{ porzione fluida}$$

$$\mu V = -\frac{\rho g \sin \alpha (s - y)^2}{2} + K \quad \rightarrow \quad V(0) = 0$$

$$V(y) = \frac{\rho g \sin \alpha}{2\mu} \left[s^2 - (s - y)^2 \right] \quad S \text{ \u00e8 incognita}$$

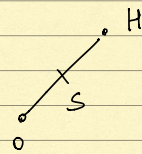
Impongo il bilancio della quantit\u00e0 di moto ad una porzione unitaria delle parti rigide



$$\Rightarrow z = (H - s) \rho g \sin \alpha$$

Questo bilancio mi fornisce s

$$s = \left(H - \frac{z}{\rho g \sin \alpha} \right)$$

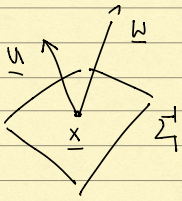


$s < H$ automatico

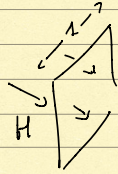
$$s > 0 \quad \Leftrightarrow \quad \rho g \sin \alpha > \frac{z}{H} \quad H > \frac{z}{\rho g \sin \alpha}$$

Come determino H ? Con la conoscenza del flusso in $x = 0$

$$Q = \text{flusso} = \int_0^H v(y) dy$$



$$\text{flusso att. } \Sigma_1 = \int_{\Sigma_1} \underline{w} \cdot \underline{n} \, d\sigma$$



$$Q = \int_0^H V(y) \, dy = \text{int. x part} \quad [0, s] \quad V(y) = \frac{\rho g s \sin \alpha}{2\mu} [s^2 - (s-y)^2]$$

$$[0, s] \quad V_y = \frac{\rho g s \sin \alpha}{\mu} (s-y)$$

$$Q = yV(y) \Big|_0^H - \int_0^H y V_y \, dy = HV(s) - \int_0^s y \frac{\rho g s \sin \alpha}{\mu} (s-y) \, dy$$

$$Q = H \frac{\rho g s \sin \alpha}{2\mu} s^2 - \frac{\rho g s \sin \alpha}{\mu} \left[\frac{y^2 s}{2} - \frac{y^3}{3} \right]_0^s$$

$$Q = \frac{\rho g s \sin \alpha}{2\mu} H s^2 - \frac{\rho g s \sin \alpha}{\mu} \frac{s^3}{6} = \frac{\rho g s \sin \alpha}{6\mu} [3Hs^2 - s^3]$$

$$s = \left(H - \frac{z}{\rho g \sin \alpha} \right)$$

$$Q = \frac{\rho g s \sin \alpha H^3}{6\mu} \left[3 \left(\frac{s}{H} \right)^2 - \left(\frac{s}{H} \right)^3 \right]$$

$$\frac{s}{H} = 1 - \frac{z}{\rho g \sin \alpha H}$$

$$H = \frac{z}{(\rho g \sin \alpha) \left(1 - \frac{s}{H} \right)}$$

$$\frac{s}{H} = z \in (0, 1)$$

$$Q = Q(z) = \frac{\cancel{ggsind} z^3 (3z^2 - z^3)}{6\mu (ggsind)^{3/2} (1-z)^3} = \underbrace{\frac{z^3}{6\mu (ggsind)^2}}_{\psi} \left[\frac{3z^2 - z^3}{(1-z)^3} \right]$$

$$Q = \psi \left(\frac{3z^2 - z^3}{(1-z)^3} \right) : [0,1) \rightarrow \mathbb{R}$$

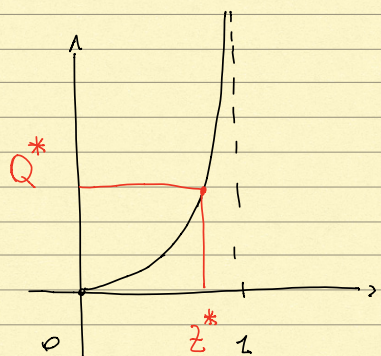
$$Q(0) = 0$$

$$Q(1^-) = +\infty$$

$$Q'(z) = \psi \frac{(6z - 3z^2)(1-z)^3 + 3(1-z)^2(3z^2 - z^3)}{(1-z)^8}$$

$$Q'(z) = \psi \frac{6z - \cancel{6z^2} - \cancel{3z^2} + \cancel{3z^3} + \cancel{9z^2} - \cancel{3z^3}}{(1-z)^4} = \psi \frac{6z}{(1-z)^4} \geq 0$$

$$Q''(z) = \psi \frac{6(1-z)^4 + 4(1-z)^3 \cdot 6z}{(1-z)^8} > 0$$



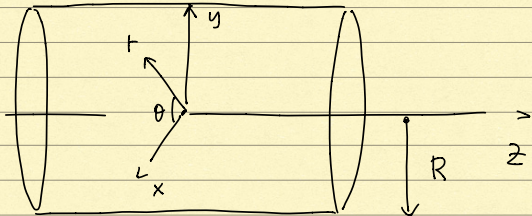
Q è strett. monotona su $(0,1)$

$$\forall Q^* > 0 \quad \exists! \quad z^* = \frac{S^*}{H^*} \in (0,1)$$

$$\Rightarrow H^* = \frac{6}{ggsind(1-z^*)}$$

Flusso allo Poiseuille in geometria cilindrica

COORD. CILINDRICHE



$$\begin{cases} x = r \cos \theta \\ y = r \sin \theta \\ z = z \end{cases}$$

$$\underline{v} = v(r) \underline{e}_z \quad p(r, \theta, z)$$

Il bilancio di massa è automaticamente soddisfatto


$$\rho \frac{dv}{dt} = -\nabla p + \text{div}(\underline{S}) + \underline{f} \quad \Rightarrow \quad \underline{\text{Scriverlo in coord. cilindriche}}$$

$$0 = \frac{\partial p}{\partial r} \quad 0 = \frac{\partial p}{\partial \theta} \quad \underline{f} = 0$$

$$0 = -\frac{\partial p}{\partial z} + \frac{1}{r} \frac{\partial}{\partial r} \left[r \left(\mu \frac{\partial v}{\partial r} - b \right) \right] \quad \Rightarrow \quad p = p(z)$$

$$p_z = \text{costante} \quad \Rightarrow \quad \begin{cases} p_z = -\frac{\Delta p}{L} = -G < 0 \\ G > 0 \end{cases} \quad L \text{ lunghezza condotta}$$

$$-Gr = \left[r \left(\mu \frac{\partial v}{\partial r} - b \right) \right]_r \quad \left| \quad \frac{d}{dr} \left(\frac{Gr^2}{2} - r \left(\mu \frac{\partial v}{\partial r} - b \right) \right) = 0 \right.$$



$$\uparrow r = s(t)$$

$$\frac{\partial v}{\partial r}(s) = 0$$

$$\frac{C}{r} - \frac{Gr}{2} = \mu V_r - b$$

$$\frac{C}{s} - \frac{Gs}{2} = -b$$

$$C = \frac{Gs^2}{2} - b s$$

$$\mu V_r = \frac{Gs^2}{2r} - \frac{bs}{r} + b - \frac{Gr}{2}$$

$$\mu V_r = \frac{G}{2} \left(\frac{s^2}{r} - r \right) - b \left(\frac{s}{r} - 1 \right) \quad [s, R]$$

Integro tra r e R

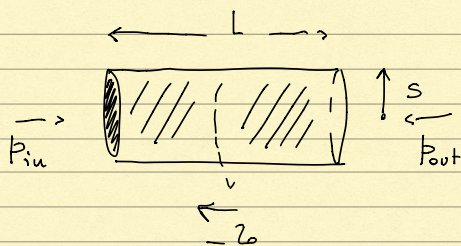
$V(R) = 0$ (No slip)

$$-\mu V(r) = \frac{G}{2} \left(s^2 \ln \frac{r}{R} - \frac{r^2}{2} \right) - b \left(s \ln \frac{r}{R} - r \right) \quad r > s$$

$$\mu V(r) = \frac{G}{2} \left(\frac{R^2 - r^2}{2} - s^2 \ln \left(\frac{R}{r} \right) \right) + b \left(s \ln \left(\frac{R}{r} \right) - (R - r) \right)$$

Devo det. s

Impongo il bilancio delle forze



$$p_{in} \pi s^2 - p_{out} \pi s^2 - 2\pi s \cdot L \cdot b = 0$$

$$\frac{\Delta p}{L} s = 2b$$

$$s = \frac{2b}{G}$$

$$S < R \quad \Rightarrow \quad \text{cond. di flusso} \quad G > \left(\frac{2b}{R}\right) \quad \textcircled{2} = \frac{GS}{2}$$

$$\mu V(r) = \frac{G}{2} \left(\frac{R^2 - r^2}{2} - S^2 \ln\left(\frac{R}{r}\right) \right) + \frac{G}{2} \left(S^2 \ln\left(\frac{R}{r}\right) - S(R-r) \right)$$

$$V(r) = \frac{G}{2\mu} \left[\frac{R^2 - r^2}{2} - S(R-r) \right] \quad \frac{\partial V}{\partial r} = \frac{G}{2\mu} [S - r]$$

$$V(S) = \text{velocità del nucleo rigido} = \frac{G}{4\mu} [R^2 - S^2 - 2S(R-S)]$$

$$V(S) = \frac{GR^2}{4\mu} \left[1 - \left(\frac{S}{R}\right)^2 - 2\left(\frac{S}{R}\right)\left(1 - \frac{S}{R}\right) \right] = \frac{GR^2}{4\mu} \left[1 - \left(\frac{S}{R}\right) \right]^2$$


RELAZIONE CON IL FLUSSO Q
(Equazione di Buckingham)

$$\begin{cases} x = r \cos \theta \\ y = r \sin \theta \\ z = z \end{cases}$$

$$Q = \int_{\Sigma^*} v \, d\sigma$$

$$\Sigma^* = \left\{ r: r \in [0, R] \right\} \\ \theta \in [0, 2\pi]$$

$$Q = \int_0^{2\pi} d\theta \int_0^R r v(r) dr = \text{Int. per parti}$$



z $z+d$

$$\frac{Q}{2\pi} = \frac{F^2}{2} - \int_0^R \frac{r^2}{2} v_r dr \quad v_r = \frac{G}{2\mu} (s-r)$$

$$\frac{Q}{\pi} = -\frac{G}{2\mu} \int_s^R r^2 (s-r) dr = -\frac{G}{2\mu} \left[\frac{r^3}{3} s - \frac{r^4}{4} \right]_s^R$$

$$\frac{Q}{\pi} = \frac{G}{2\mu} \left[\frac{R^4 - s^4}{4} - \frac{R^3 s}{3} + \frac{s^4}{3} \right]$$

$$\frac{Q}{\pi} = \frac{GR^4}{8\mu} \left[1 - \left(\frac{s}{R}\right)^4 - \frac{4}{3} \left(\frac{s}{R}\right) + \frac{4}{3} \left(\frac{s}{R}\right)^4 \right]$$

$$\frac{Q}{\pi} = \frac{GR^4}{8\mu} \left[1 + \frac{1}{3} \left(\frac{s}{R}\right)^4 - \frac{4}{3} \left(\frac{s}{R}\right) \right] \quad \frac{s}{R} = \xi \in (0,1)$$

$$Q = U\pi R^2 \quad U \text{ velocidade const. no ingresso}$$

$$1 = \frac{GR^2}{8\mu U} \left(1 + \frac{\xi^4}{3} - \frac{4}{3} \xi \right) \quad G = \frac{2b}{s}$$

$$1 = \frac{2b R^2}{58 \mu U} (\dots) \quad 1 = \frac{2b R}{4\mu U \left(\frac{s}{R}\right)} (\dots)$$

$$1 = \frac{2R}{4\mu U} \cdot \frac{1}{\xi} \left(1 + \frac{\xi^4}{3} - \frac{4}{3}\xi \right)$$

$$\frac{2R}{\mu U} = B_u = \text{numero di Bingham}$$

$$B_u = \frac{2}{\underbrace{\left(\frac{\mu U}{R}\right)}_{\approx 5_{12}}} \quad \text{Eq. di Buckingham}$$

$$4\xi = B_u \left(1 + \frac{\xi^4}{3} - \frac{4}{3}\xi \right)$$

$$1 + \frac{\xi^4}{3} - \frac{4}{3}\xi - 4\xi \frac{1}{B_u} = 0$$

$$\xi^4 - 4\xi \left(1 + \frac{3}{B_u} \right) + 3 = 0 \quad (\text{Eq. di Buckingham})$$

$$f(\xi) = \xi^4 - 4\xi \left(1 + \frac{3}{B_u} \right) + 3 : [0, 1] \rightarrow \mathbb{R}$$

$$f(0) = 3 > 0$$

$$f(1) = -\frac{12}{B_u} < 0 \quad \Rightarrow \exists \text{ almeno 1 zero}$$

$$f'(\xi) = 4\xi^3 - 4 - \frac{12}{B_u} = 4(\xi^3 - 1) - \frac{12}{B_u} < 0$$

$$\forall B_u^* > 0 \quad \exists! \text{ soluzione } \xi^* \in (0, 1) \quad \xi = \frac{S}{R}$$

